

4 op een rij

Relatie tussen breuken, procenten en kommagetallen.

Door: Inspie Juffie

Het materiaal van Inspie Juffie wordt met enthousiasme en plezier gemaakt. In het maken van het materiaal wordt veel tijd gestoken. Hierom is het niet toegestaan om het materiaal onder eigen naam te verspreiden zonder toestemming van Inspie Juffie.

Als je een van onze materialen in de klas hebt gebruikt dan vinden wij het wel erg leuk om de ervaringen en resultaten te zien. Je kunt ons altijd taggen op Instagram.

Wij wensen je veel plezier met deze materialen!



@inspiejuffie

4 op een rij

Breuken, procenten en kommagetallen

Spelregels:

- Om de beurt wordt er door de spelers een rondje ingekleurd.
- Een rondje mag pas worden ingekleurd als de speler het juiste percentage, kommagetal en breuk weet te benoemen dat bij het rondje hoort.
- Weet de speler niet te benoemen wat er bij het rondje hoort of is het antwoord fout, dan mag dit rondje gedurende de beurt niet meer worden ingekleurd. De speler mag tijdens deze beurt wel een ander rondje proberen te veroveren. De beurt stopt pas wanneer de speler een rondje heeft kunnen inkleuren.
- De speler die als eerste vier op een rij heeft wint.

4 op een rij

Breuken, procenten en kommagetallen

Spiekkaart

Breuk	Procent	Kommagetal
$\frac{1}{2}$	50%	0,5
$\frac{1}{3}$	$33\frac{1}{3}\%$	0,33
$\frac{1}{4}$	25%	0,25
$\frac{1}{5}$	20%	0,2

Breuk	Procent	Kommagetal
$\frac{1}{8}$	12,5%	0,125
$\frac{1}{10}$	10%	0,1
$\frac{1}{20}$	5%	0,05
$\frac{1}{100}$	1%	0,01



Naam: _____

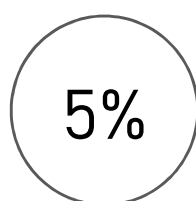
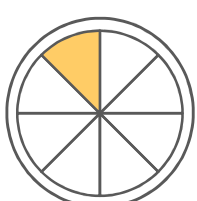
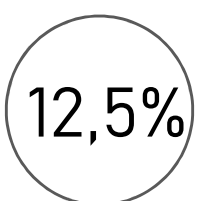


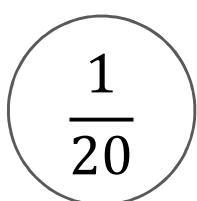

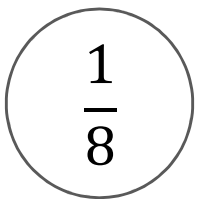
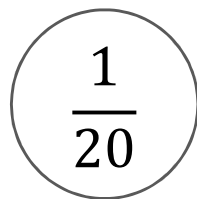
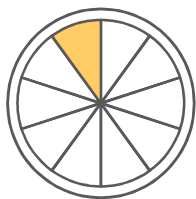
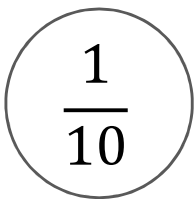

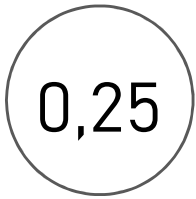

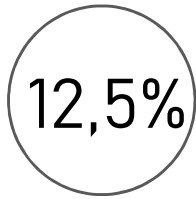
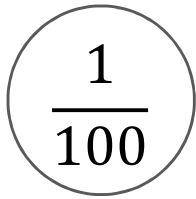

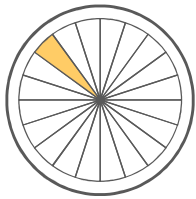
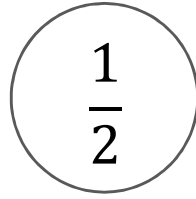
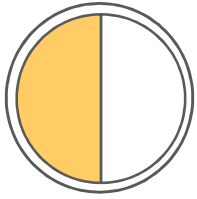


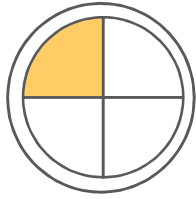



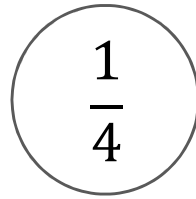
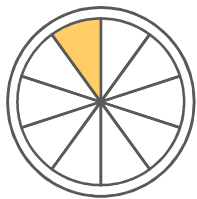
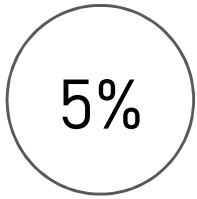
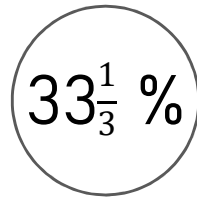
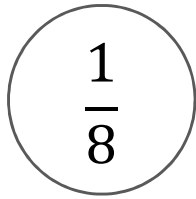



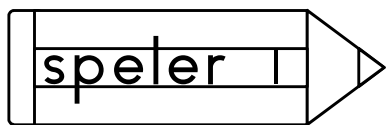
4 op een rij

Breuken, procenten en kommagetallen



Naam: _____





Naam: _____

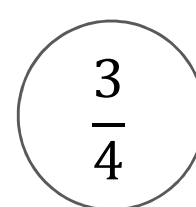
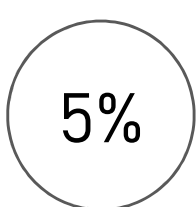
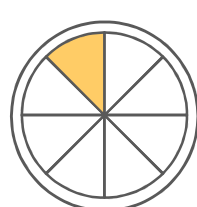
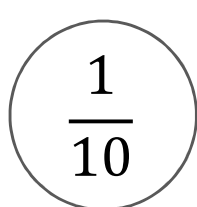

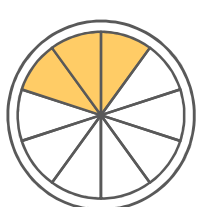
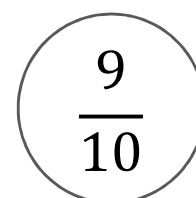
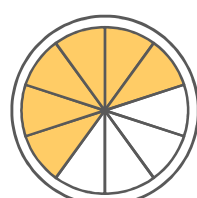




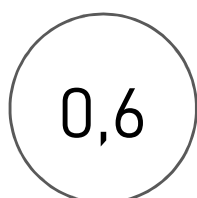
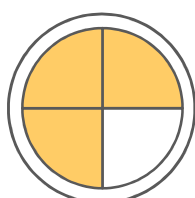
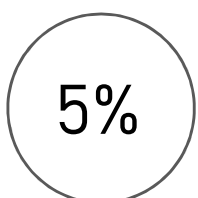

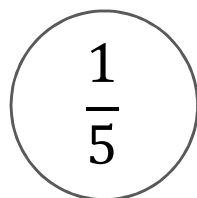
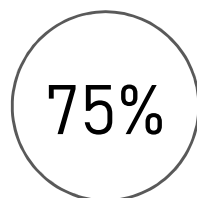
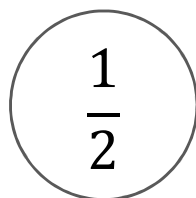
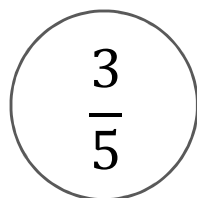
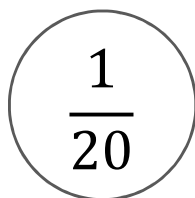
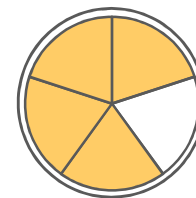

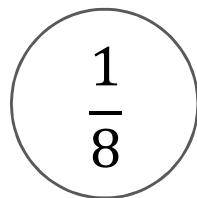
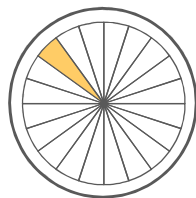
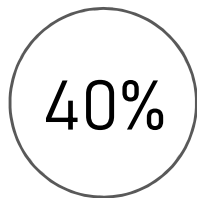
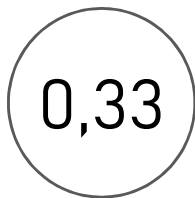


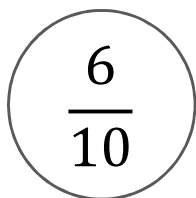
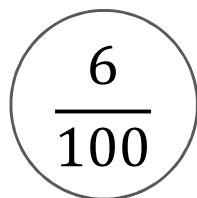
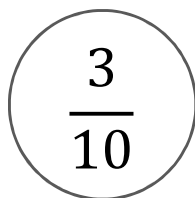


4 op een rij

Breuken, procenten en kommagetallen



Naam: _____





Naam: _____



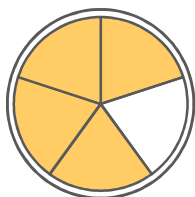
4 op een rij

Breuken, procenten en kommagetallen



Naam: _____

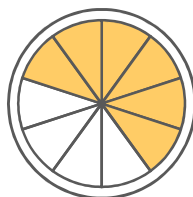
$66\frac{2}{3}\%$



45%

$\frac{7}{20}$

$\frac{4}{8}$



3%

$\frac{1}{3}$

0,66

0,06

21%

$\frac{6}{10}$

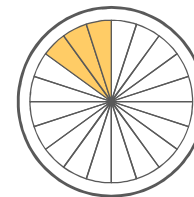
0,625



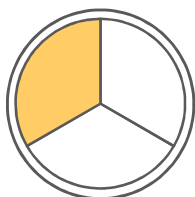
$\frac{5}{20}$

0,125

$\frac{47}{100}$



11%



0,02

$\frac{2}{3}$

1%

15%

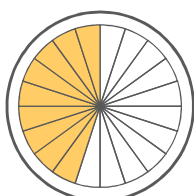
$\frac{5}{8}$

9%

0,72

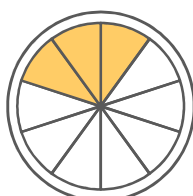
$\frac{12}{20}$

60%



0,375

$\frac{3}{20}$



0,6

$33\frac{1}{3}\%$

10%

0,33

0,22

$\frac{3}{8}$

$\frac{12}{100}$

70%

5%

35%

$\frac{7}{10}$

